



Name: _____

Ten Frame Addition

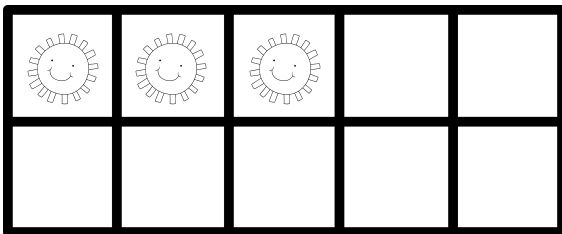
Count the suns. How many more do you need to make 10?



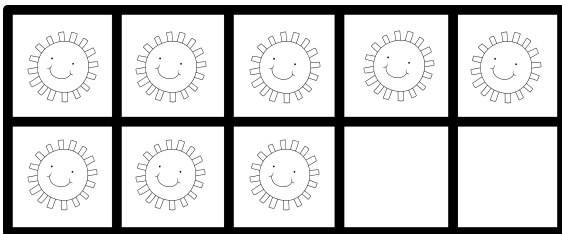
$$\underline{\quad\quad} + \underline{\quad\quad} = 10$$



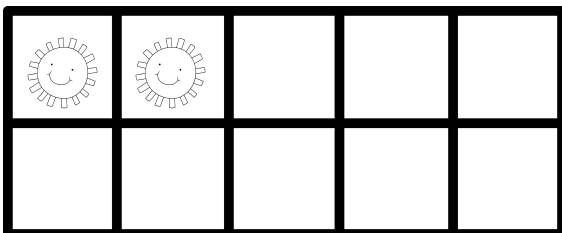
$$\underline{\quad\quad} + \underline{\quad\quad} = 10$$



$$\underline{\quad\quad} + \underline{\quad\quad} = 10$$



$$\underline{\quad\quad} + \underline{\quad\quad} = 10$$

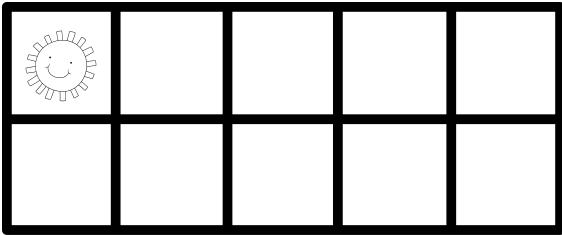


$$\underline{\quad\quad} + \underline{\quad\quad} = 10$$


Name: _____

Ten Frame Addition

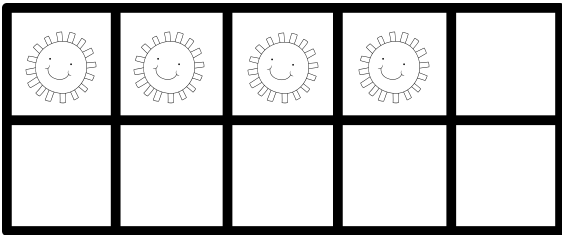
Count the suns. How many more do you need to make 10?



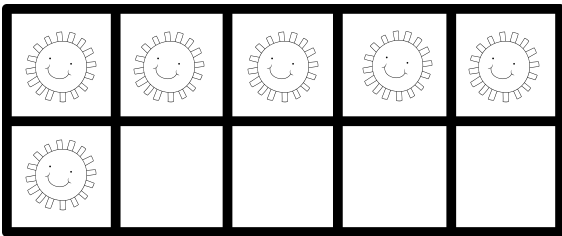
$$\underline{\quad} + \underline{\quad} = 10$$




$$\underline{\quad} + \underline{\quad} = 10$$



$$\underline{\quad} + \underline{\quad} = 10$$



$$\underline{\quad} + \underline{\quad} = 10$$



$$\underline{\quad} + \underline{\quad} = 10$$