









Skip Counting by 2's

Cut and paste the numbers to show counting by 2's. Start with 2 and see how many ladybugs there are altogether.



2

8

16

4

14

6

10

12

Skip Counting by 2's

Fill in the missing numbers.



2 4 6 8 _____ 12

6 8 10 12 14 _____

4 6 _____ 10 12 14







2 _____ 6 8 10 12

_____ 8 10 12 14 16

12 14 16 _____ 20

Skip Counting by 5's

Cut and paste the numbers to show counting by 5's. Start with 5 and see how many raindrops there are altogether.



5

15

30

20

40


25

10

35

Skip Counting by 5's

Fill in the missing numbers.



5 10 15 20 _____ 30

15 20 25 30 35 _____

10 15 _____ 25 30 35

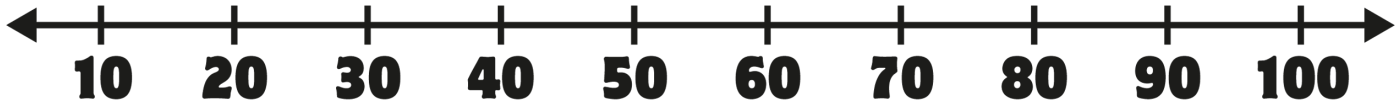
25 30 35 40 _____ 50





20 25 _____ 35 40 45



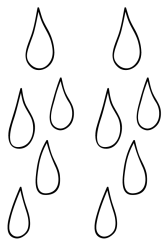

15 _____ 25 30 35 40

Skip Counting by 10's

Cut and paste the numbers to show counting by 10's. Start with 10 and see how many raindrops there are altogether.



			
<input data-bbox="115 647 349 859" type="text"/>	<input data-bbox="406 647 641 859" type="text"/>	<input data-bbox="698 647 932 859" type="text"/>	<input data-bbox="989 647 1223 859" type="text"/>

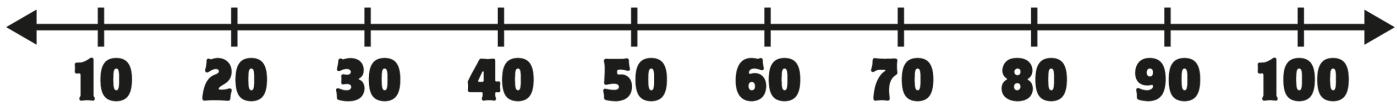
			
<input data-bbox="132 1201 366 1418" type="text"/>	<input data-bbox="424 1201 658 1418" type="text"/>	<input data-bbox="715 1201 949 1418" type="text"/>	<input data-bbox="1006 1201 1240 1418" type="text"/>

10 30 70 80 40 50

60 20

Skip Counting by 10's

Fill in the missing numbers.



10 20 30 40 _____ 60

20 30 _____ 50 60 70

40 50 60 70 80 _____

30 40 50 60 _____ 80

40 50 _____ 70 80 90

10 _____ 30 40 50 60