

Thank you for downloading!

Thank you so much for downloading this printable! I hope you find it helpful!

These printables are for personal or classroom use only. That means you cannot copy, reproduce, or change any content from the download, except for your own personal, non-commercial use.

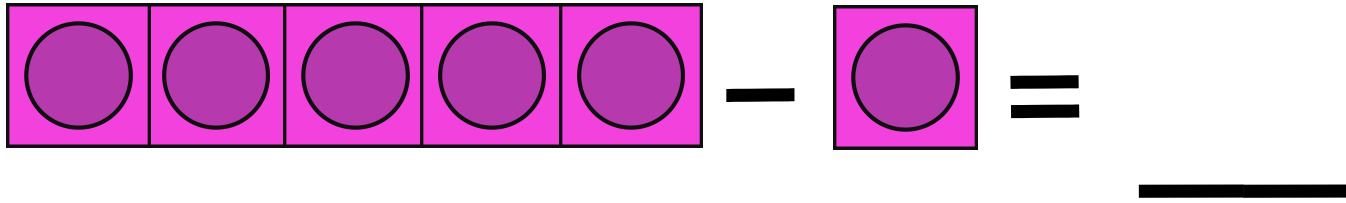
- You may **not** redistribute the contents of my downloads in whole or in part, for any reason.
- Please do not link directly to the PDF online or share this on Dropbox or another shared website.

Make sure to use the most current version of Adobe Reader to avoid any printing problems.

If you have any questions, please email me at angela@teachingmama.org

-Angela

Subtraction with Snap Cubes



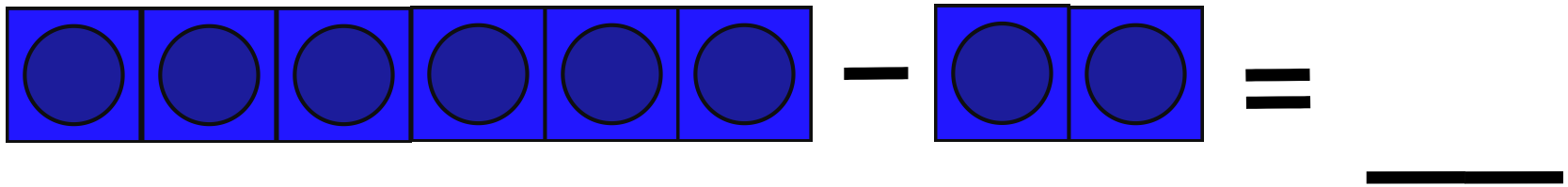
A row of five purple snap cubes followed by a minus sign, a single purple snap cube, an equals sign, and a blank line for the answer.

$$5 - 1 = \underline{\quad}$$



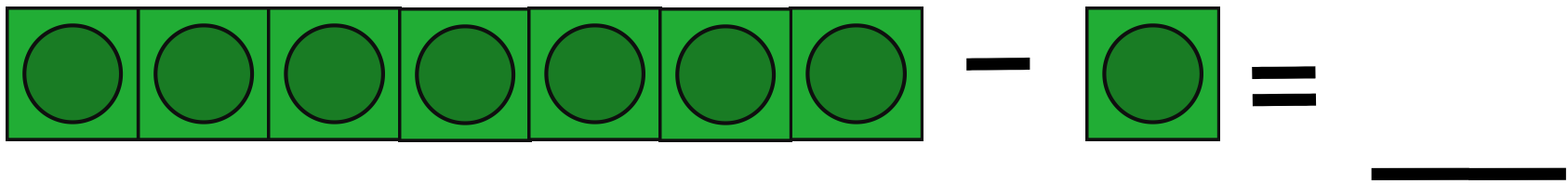
A row of four black snap cubes followed by a minus sign, three black snap cubes, an equals sign, and a blank line for the answer.

$$4 - 3 = \underline{\quad}$$



A row of six blue snap cubes followed by a minus sign, two blue snap cubes, an equals sign, and a blank line for the answer.

$$6 - 2 = \underline{\quad}$$



A row of seven green snap cubes followed by a minus sign, one green snap cube, an equals sign, and a blank line for the answer.

$$7 - 1 = \underline{\quad}$$

Subtraction with Snap Cubes


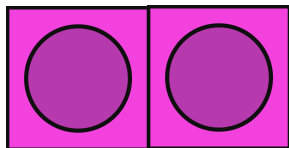
$$\begin{array}{|c|c|c|c|c|c|} \hline \bigcirc & \bigcirc & \bigcirc & \bigcirc & \bigcirc & \bigcirc \\ \hline \end{array} - \begin{array}{|c|c|c|} \hline \bigcirc & \bigcirc & \bigcirc \\ \hline \end{array} = \underline{\hspace{2cm}}$$

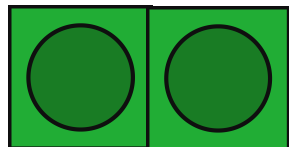

$$\begin{array}{|c|c|c|c|} \hline \bigcirc & \bigcirc & \bigcirc & \bigcirc \\ \hline \end{array} - \begin{array}{|c|c|} \hline \bigcirc & \bigcirc \\ \hline \end{array} = \underline{\hspace{2cm}}$$



$$\begin{array}{|c|c|c|c|c|} \hline \bigcirc & \bigcirc & \bigcirc & \bigcirc & \bigcirc \\ \hline \end{array} - \begin{array}{|c|c|} \hline \bigcirc & \bigcirc \\ \hline \end{array} = \underline{\hspace{2cm}}$$

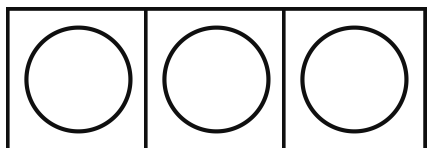
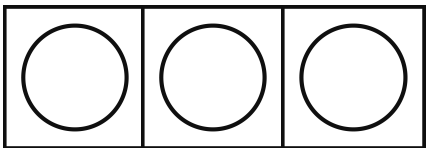
$$\begin{array}{|c|c|c|c|c|} \hline \bigcirc & \bigcirc & \bigcirc & \bigcirc & \bigcirc \\ \hline \end{array} - \begin{array}{|c|c|c|} \hline \bigcirc & \bigcirc & \bigcirc \\ \hline \end{array} = \underline{\hspace{2cm}}$$

Subtraction with Snap Cubes

 $-$  $=$

 $-$  $=$

 $-$  $=$

 $-$  $=$
