

Thank you for downloading!

Thank you so much for downloading this printable! I hope you find it helpful!

These printables are for personal or classroom use only. That means you cannot copy, reproduce, or change any content from the download, except for your own personal, non-commercial use.

- You may **not** redistribute the contents of my downloads in whole or in part, for any reason.
- Please do not link directly to the PDF online or share this on Dropbox or another shared website.

Make sure to use the most current version of Adobe Reader to avoid any printing problems.


If you have any questions, please email me at angela@teachingmama.org

The clip art is from the following:



Name: _____

Roll the Facts



Roll one die, write the number, and answer the addition fact.

$1 + \square = \square$

$1 + \square = \square$

$1 + \square = \square$

$1 + \square = \square$

$1 + \square = \square$

$1 + \square = \square$

$1 + \square = \square$




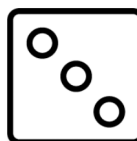
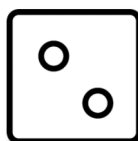

$1 + \square = \square$

$1 + \square = \square$

$1 + \square = \square$


$1 + \square = \square$

$1 + \square = \square$



Name: _____

Roll the Facts



Roll one die, write the number, and answer the addition fact.

$2 + \square = \square$

$2 + \square = \square$

$2 + \square = \square$

$2 + \square = \square$

$2 + \square = \square$

$2 + \square = \square$

$2 + \square = \square$




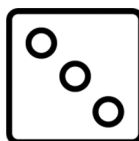
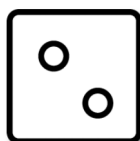

$2 + \square = \square$

$2 + \square = \square$

$2 + \square = \square$


$2 + \square = \square$

$2 + \square = \square$



Name: _____

Roll the Facts



Roll one die, write the number, and answer the addition fact.

$3 + \square = \square$

$3 + \square = \square$

$3 + \square = \square$

$3 + \square = \square$

$3 + \square = \square$

$3 + \square = \square$

$3 + \square = \square$




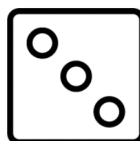


$3 + \square = \square$

$3 + \square = \square$

$3 + \square = \square$


$3 + \square = \square$

$3 + \square = \square$



Name: _____

Roll the Facts



Roll one die, write the number, and answer the addition fact.

$4 + \square = \square$

$4 + \square = \square$

$4 + \square = \square$

$4 + \square = \square$

$4 + \square = \square$

$4 + \square = \square$

$4 + \square = \square$




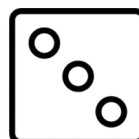
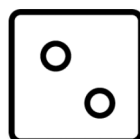

$4 + \square = \square$

$4 + \square = \square$

$4 + \square = \square$


$4 + \square = \square$

$4 + \square = \square$



Name: _____

Roll the Facts



Roll one die, write the number, and answer the addition fact.

$5 + \square = \square$

$5 + \square = \square$

$5 + \square = \square$

$5 + \square = \square$

$5 + \square = \square$

$5 + \square = \square$

$5 + \square = \square$



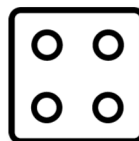
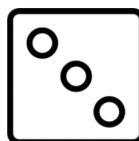
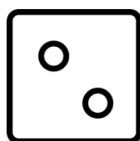

$5 + \square = \square$

$5 + \square = \square$

$5 + \square = \square$


$5 + \square = \square$

$5 + \square = \square$



Name: _____

Roll the Facts



Roll one die, write the number, and answer the addition fact.

$6 + \square = \square$

$6 + \square = \square$

$6 + \square = \square$

$6 + \square = \square$

$6 + \square = \square$

$6 + \square = \square$

$6 + \square = \square$




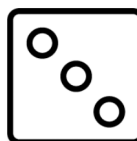
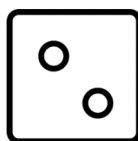

$6 + \square = \square$

$6 + \square = \square$

$6 + \square = \square$


$6 + \square = \square$

$6 + \square = \square$



Name: _____

Roll the Facts



Roll one die, write the number, and answer the addition fact.

$7 + \square = \square$

$7 + \square = \square$

$7 + \square = \square$

$7 + \square = \square$

$7 + \square = \square$

$7 + \square = \square$

$7 + \square = \square$


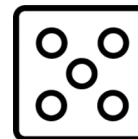

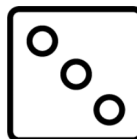
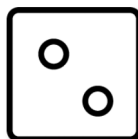

$7 + \square = \square$

$7 + \square = \square$

$7 + \square = \square$


$7 + \square = \square$

$7 + \square = \square$



Name: _____

Roll the Facts



Roll one die, write the number, and answer the addition fact.

$8 + \square = \square$

$8 + \square = \square$

$8 + \square = \square$

$8 + \square = \square$

$8 + \square = \square$

$8 + \square = \square$

$8 + \square = \square$


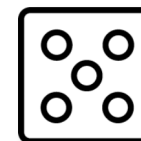

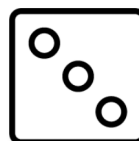
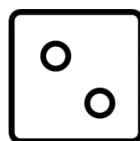

$8 + \square = \square$

$8 + \square = \square$

$8 + \square = \square$


$8 + \square = \square$

$8 + \square = \square$



Name: _____

Roll the Facts



Roll one die, write the number, and answer the addition fact.

$9 + \square = \square$

$9 + \square = \square$

$9 + \square = \square$

$9 + \square = \square$

$9 + \square = \square$

$9 + \square = \square$

$9 + \square = \square$


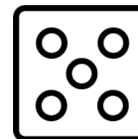

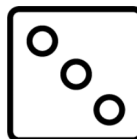
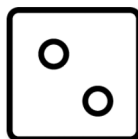

$9 + \square = \square$

$9 + \square = \square$

$9 + \square = \square$

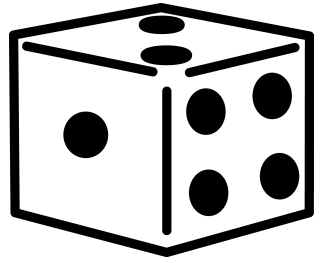
$9 + \square = \square$

$9 + \square = \square$



Name: _____

Roll the Facts



Roll one die, write the number, and answer the addition fact.

$10 + \square = \square$

$10 + \square = \square$

$10 + \square = \square$

$10 + \square = \square$

$10 + \square = \square$

$10 + \square = \square$

$10 + \square = \square$

$10 + \square = \square$

$10 + \square = \square$

$10 + \square = \square$

$10 + \square = \square$

$10 + \square = \square$

