

Name: _____

Identifying Place Value

Directions: Write the place value and digit value for the underlined digit.

Number	Place Value	Digit Value
1 <u>6</u>		
<u>3</u> 5		
9 <u>8</u>		
<u>1</u> 20		
3 <u>4</u> 0		
<u>1</u> 322		
<u>3</u> 248		
5 <u>4</u> 19		

Name: _____

Identifying Place Value

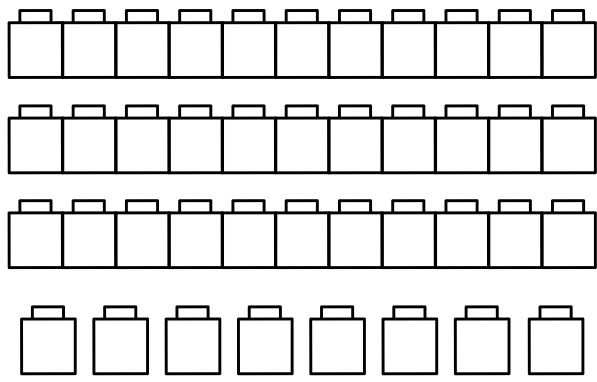
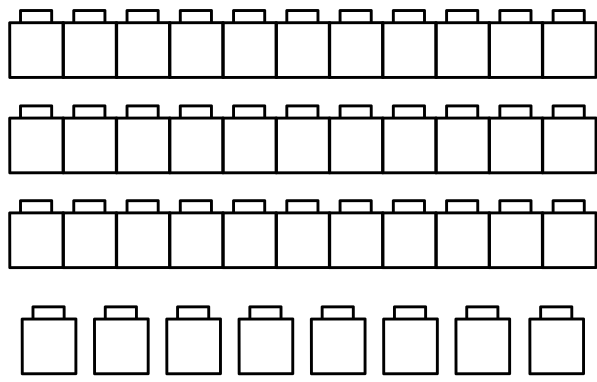
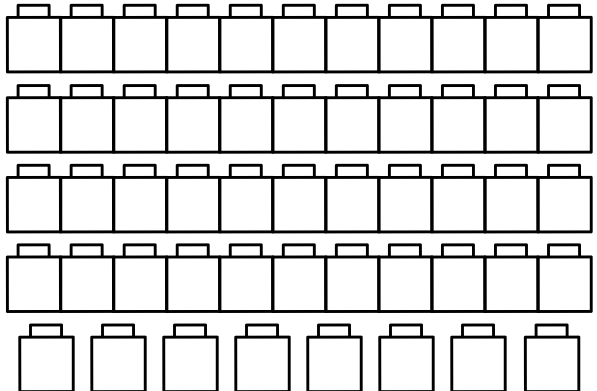
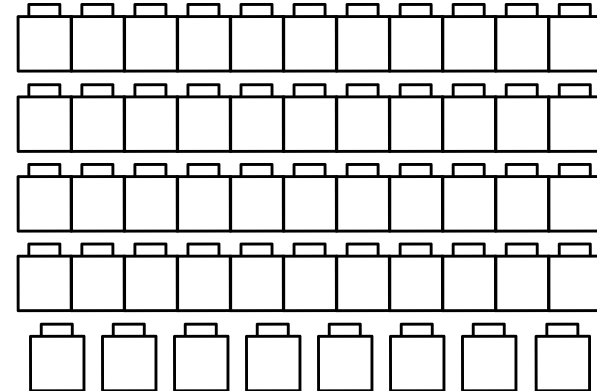
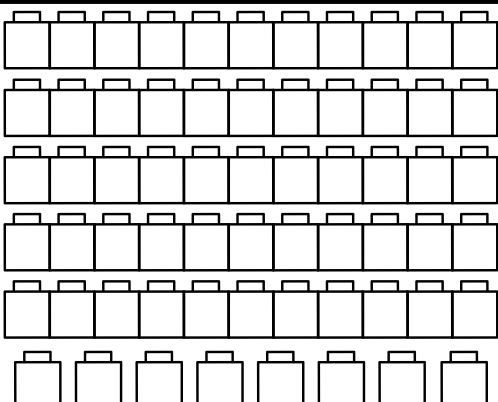
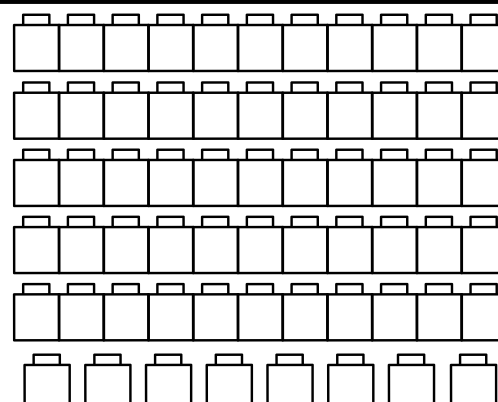
Directions: Identify the place of each digit in the following numbers.

Number	Thousands	Hundreds	Tens	Ones
8				
53				
99				
197				
248				
564				
2144				
3172				

Name: _____

Place Value Practice


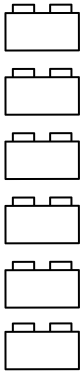
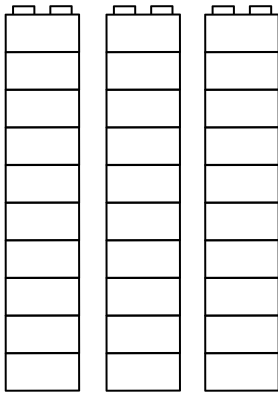
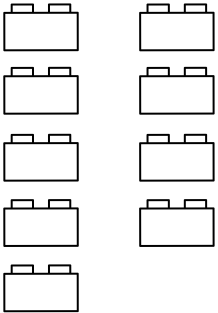
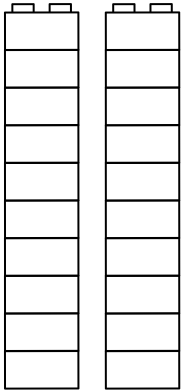
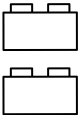

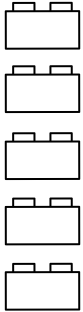
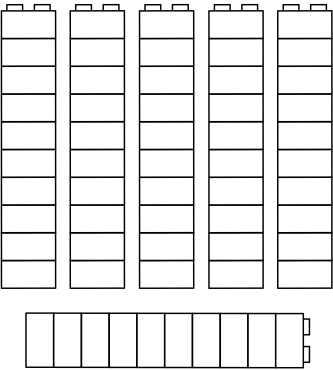
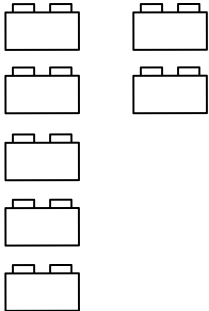
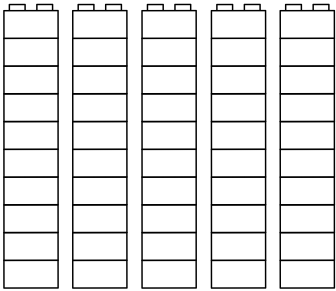

Directions: Color the blocks according to the given number. Write in the tens and ones for each set.

	
33 Tens Ones	24 Tens Ones
	
45 Tens Ones	18 Tens Ones
	
39 Tens Ones	52 Tens Ones

Name: _____

Tens and Ones

Directions: Count how many tens and ones.

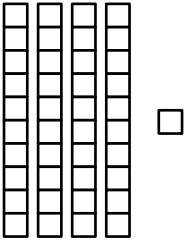


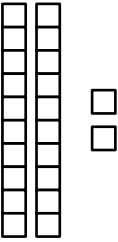
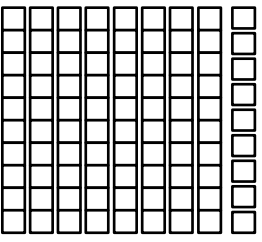
			
Tens	Ones	Tens	Ones
			
Tens	Ones	Tens	Ones
			
Tens	Ones	Tens	Ones

Name: _____

Place Value Sorting

Directions: Cut and paste the correct answer in each column.

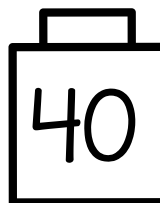

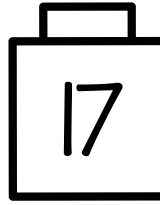

56	89	22	41	37

				
3 tens 7 ones	5 tens 6 ones	2 tens 2 ones	8 tens 9 ones	4 tens 1 ones
30 + 7	2 + 20	50 + 6	1 + 40	80 + 9

Name: _____

Place Value Practice

Directions: Draw to show the tens and ones of each number.



Name: _____

Expanded Form

Directions: Complete the chart below by writing the expanded form of the following numbers.

Number	Hundreds	Tens	Ones
92			
58			
196			
238			
351			
308			
518			
674			

Millions to Millionths Place Value Chart

Millions 1,000,000	M						
Hundred Thousands 100,000	Hth						
Ten Thousands 10,000	Tth						
Thousands 1,000	Th						
Hundreds 100	H						
Tens 10	T						
Ones 1	O						
Decimal Point	●	●	●	●	●	●	●
Tenths 0.1	t						
Hundredths 0.01	h						
Thousandths 0.001	th						
Ten Thousandths 0.0001	tth						
Hundred Thousandths 0.00001	hth						
Millionths 0.000001	m						